

Geometry Check-Up Quiz

Assessment as Learning

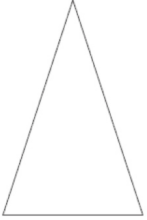
Grade 2

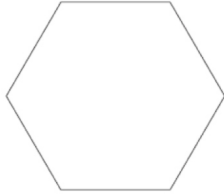
Name:

Parent Signature: _____

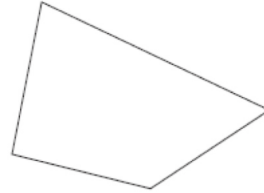
Knowledge and Understanding


1. Name the following 2D (flat) shapes (you may use a word from the Word Bank more than once).

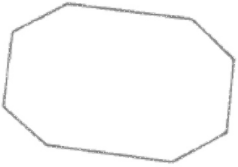




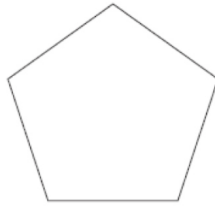




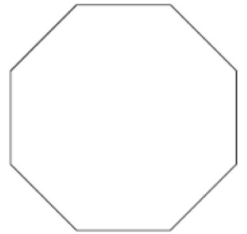












Word Bank

square trapezoid pentagon triangle hexagon rectangle
octagon heptagon rhombus diamond quadrilateral

2. Match the flat shapes with the number of sides or angles each has.

square

4 vertices

octagon

5 sides

trapezoid

8 vertices

pentagon

4 sides

triangle

3 vertices

5 vertices